



# Plotting Points in Cartesian Plane

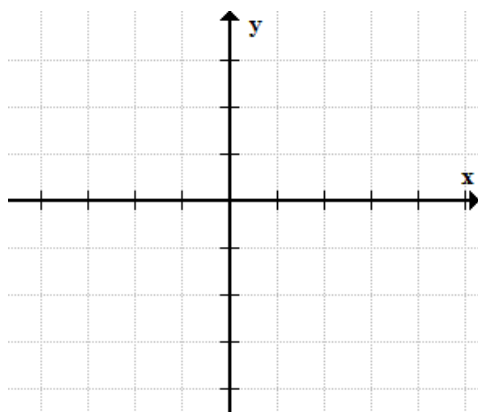
Name: \_\_\_\_\_

Date: \_\_\_\_\_

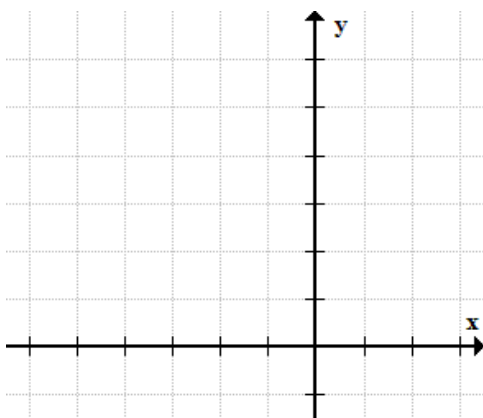
Score: \_\_\_\_\_

Direction: Plot each point in the  $xy$ -axis.

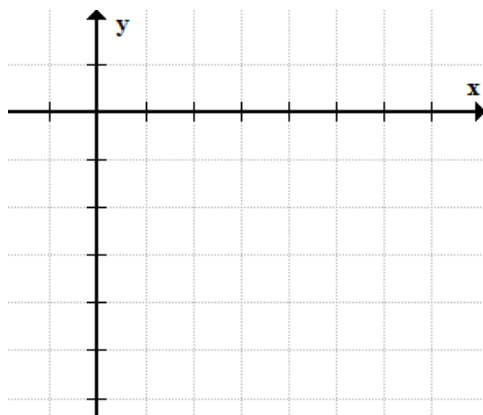
1)  $(3,1)$



2)  $(-2,5)$



3)  $(6,-4)$





# Plotting Points in Cartesian Plane

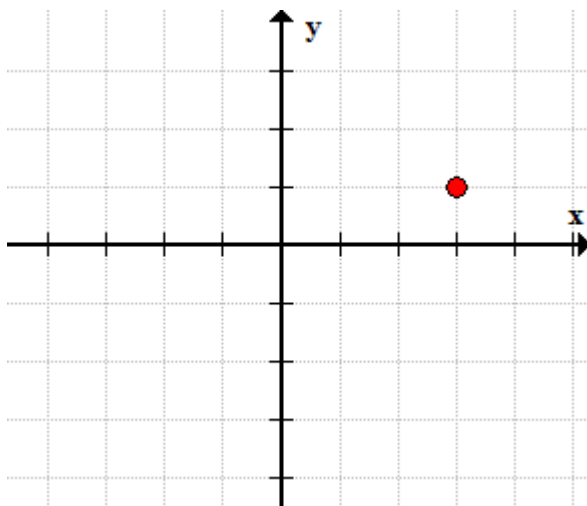
Name: \_\_\_\_\_

Date: \_\_\_\_\_

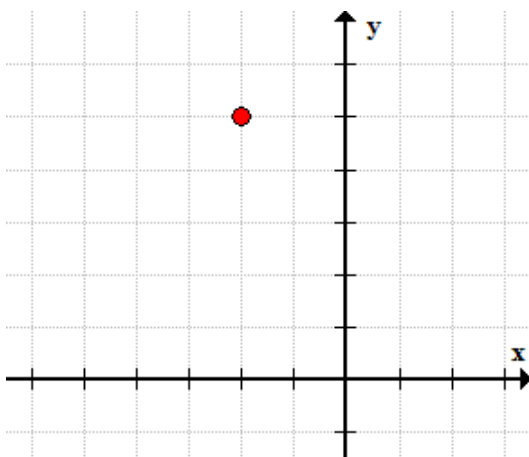
Score: \_\_\_\_\_

Direction: Plot each point in the xy-axis.

1)  $(3,1)$



2)  $(-2,5)$



3)  $(6,-4)$

